




Adı :
Soyadı:

2. Sınıf Matematik


Dört İşlem Alıştırmalar-1

$$\begin{array}{r} 75 \\ - 45 \\ \hline \end{array}$$


$$\begin{array}{r} 1 \text{ 🍓} \\ + 19 \\ \hline \end{array}$$


$$\begin{array}{r} \text{🍇 🍏} \\ | 4 \\ \hline \end{array}$$


$$\begin{array}{r} \text{🌰} \\ \times \text{🍇} \\ \hline \end{array}$$


$$\begin{array}{r} 43 \\ + 28 \\ \hline \end{array}$$



$$\begin{array}{r} \text{🌳} 5 \\ - 5 \text{ 🌟} \\ \hline \end{array}$$


$$\begin{array}{r} \text{🌙 ☀️} \\ | \text{🌍} \\ \hline \end{array}$$



$$\begin{array}{r} \text{🌙} \\ \times \text{🚗} \\ \hline \end{array}$$


$$\begin{array}{r} 5 \\ \times 8 \\ \hline \end{array}$$


$$\begin{array}{r} \text{🏀 🏀} \\ + 2 \text{ 🏐} \\ \hline \end{array}$$



$$\begin{array}{r} \text{🏐 🏐} \\ - \text{🏀} 5 \\ \hline \end{array}$$



$$\begin{array}{r} \text{🏐 🏐} \\ | 3 \\ \hline \end{array}$$


$$\begin{array}{r} 86 \\ - 59 \\ \hline \end{array}$$


$$\begin{array}{r} \text{🚗} 6 \\ + 3 \text{ 🚗} \\ \hline \end{array}$$


$$\begin{array}{r} \text{🚗 🚗} \\ | 4 \\ \hline \end{array}$$


$$\begin{array}{r} \text{🚗} \\ \times \text{🚗} \\ \hline \end{array}$$


$$\begin{array}{r} 91 \\ - 39 \\ \hline \end{array}$$


$$\begin{array}{r} \text{🎒 🎒} \\ | \text{🎒} \\ \hline \end{array}$$

$$\begin{array}{r} 7 \\ \times \text{🎒} \\ \hline \end{array}$$


$$\begin{array}{r} \text{🎒} 9 \\ + \text{🎒} \\ \hline \end{array}$$


Adı :
Soyadı:

2. Sınıf Matematik

Dört İşlem Alıştırmalar-1

+	20	18	36
42	A		
35		B	
24			C

-	25	42	33
52	D		
85		E	
53			F

x	5	4	3
7	H		
8		K	
9			M

÷	2	3	4
14	P		
18		R	
20			S

$A - S = ?$

$B + P = ?$

$C - H = ?$

$R + K = ?$

$P + E = ?$

$D - M = ?$

$F - S = ?$

$F \div S = ?$

$P \times S = ?$

$H \div S = ?$

$E - K = ?$

$H + A = ?$

$32 + 14 - 25 = \dots\dots$

$4 \times 6 \div 3 = \dots\dots$

$25 + 11 \div 4 = \dots\dots$

$52 - 48 \times 6 = \dots\dots$

$7 \times 4 + 32 = \dots\dots$

$35 \div 5 \times 3 = \dots\dots$

$36 \div 4 \times 2 = \dots\dots$

$4 \times 6 \div 3 = ?$

$15 \div 3 \times 7 = ?$

$25 - 13 \div 3 = \dots\dots$

$5 \times 7 - 30 = \dots\dots$

$42 + 55 - 26 = \dots\dots$

$50 - 30 + 20 = \dots\dots$

$32 \div 4 \times 5 = \dots\dots$

$18 + 14 \div 4 = \dots\dots$